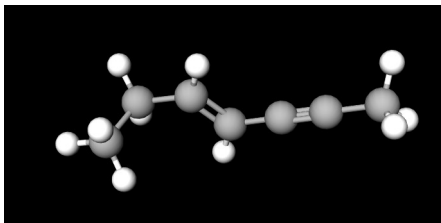
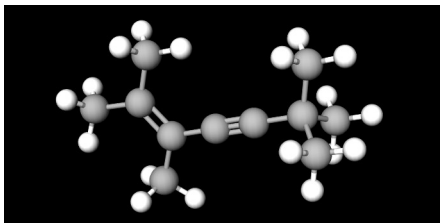
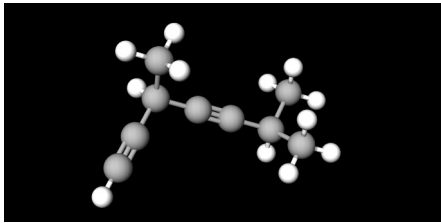
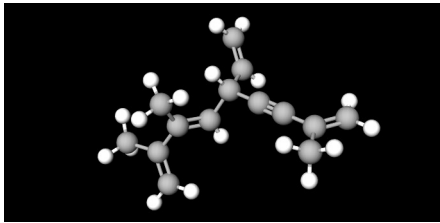
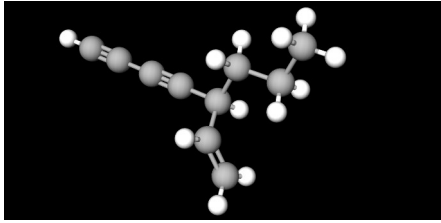
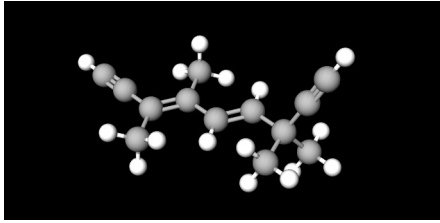


Problema917: Nombra los siguientes alquinos:

<p>a)</p> 	<p>b)</p> 
<p>c)</p> 	<p>d)</p> 
<p>e)</p> 	<p>f)</p> 

a)  $\text{CH}_3\text{-CH}_2\text{-CH=CH-C}\equiv\text{C-CH}_3$  hept-4-en-2-ino

b) 
$$\begin{array}{c} \text{CH}_3 \quad \text{CH}_3 \\ | \quad | \\ \text{CH}_3\text{-C=C-C}\equiv\text{C-C-CH}_3 \\ | \quad | \\ \text{CH}_3 \quad \text{CH}_3 \end{array}$$
 2,3,6,6-tetrametilhepta-2-en-4-ino

c) 
$$\begin{array}{c} \text{CH}\equiv\text{C-CH-C}\equiv\text{C-CH-CH}_3 \\ | \quad | \\ \text{CH}_3 \quad \text{CH}_3 \end{array}$$
 3,6-dimetilhepta-1,4-diino

d) 
$$\begin{array}{c} \text{CH}_3 \quad \quad \quad \text{CH}_3 \\ | \quad \quad \quad | \\ \text{CH}_2\text{=C-C=CH-CH-C}\equiv\text{C-C=CH}_2 \\ | \quad \quad | \\ \text{CH}_3 \quad \text{CH=CH}_2 \end{array}$$
 5-etenil-2,3,8-trimetilnona-1,3,8-trien-6-ino

