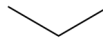
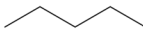
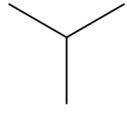
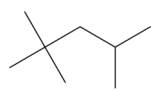
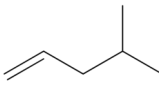


Problema 506: Dibuja las fórmulas esquemáticas de las siguientes moléculas:

	Fórmula semidesarrollada	Fórmula esquemática
a)	$\text{CH}_3 - \text{CH}_2 - \text{CH}_3$	
b)	$\text{CH}_3 - \text{CH}_2 - \text{CH}_2 - \text{CH}_2 - \text{CH}_3$	
c)	$\begin{array}{c} \text{CH}_3 - \text{CH} - \text{CH}_3 \\   \\ \text{CH}_3 \end{array}$	
d)	$\begin{array}{c} \text{CH}_3 \\   \\ \text{CH}_3 - \text{C} - \text{CH}_2 - \text{CH} - \text{CH}_3 \\   \quad   \\ \text{CH}_3 \quad \text{CH}_3 \end{array}$	
e)	$\begin{array}{c} \text{CH}_2 = \text{CH} - \text{CH}_2 - \text{CH} - \text{CH}_3 \\   \\ \text{CH}_3 \end{array}$	
f)	$\text{CH} \equiv \text{C} - \text{CH} = \text{CH} - \text{CH}_3$	